

1

a)



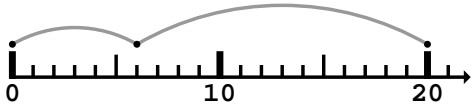
5 + **5** =

b)



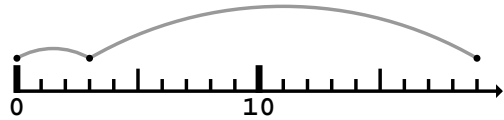
3 + **4** =

c)



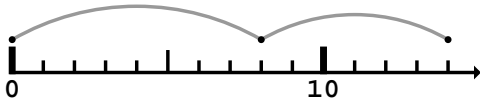
6 + **14** =

d)



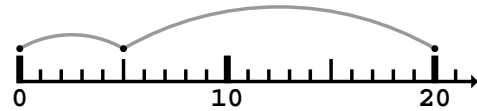
3 + **16** =

e)



8 + **6** =

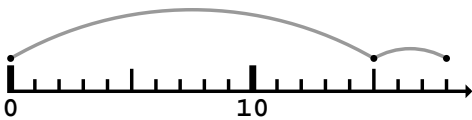
f)



5 + **15** =

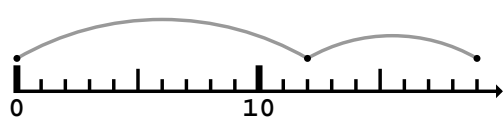
2

a)



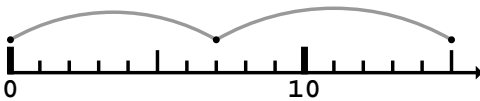
+ **3** =

b)



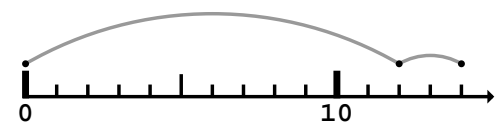
12 + =

c)



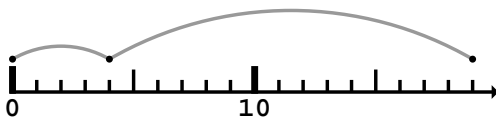
+ **8** =

d)



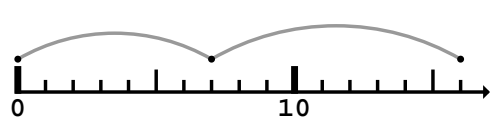
12 + =

e)



+ **15** =

f)



7 + =

1

a)



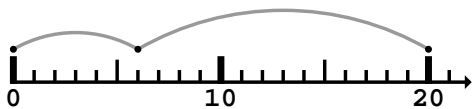
$$5 + 5 = 10$$

b)



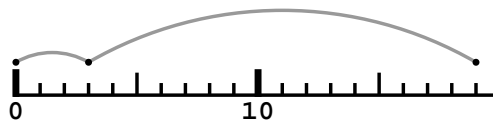
$$3 + 4 = 7$$

c)



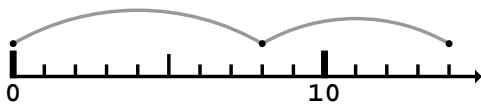
$$6 + 14 = 20$$

d)



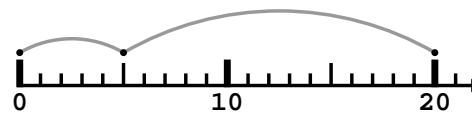
$$3 + 16 = 19$$

e)



$$8 + 6 = 14$$

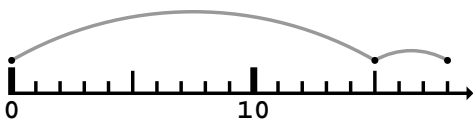
f)



$$5 + 15 = 20$$

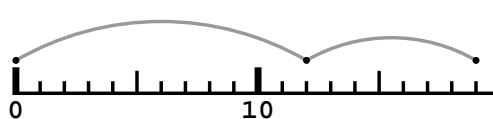
2

a)



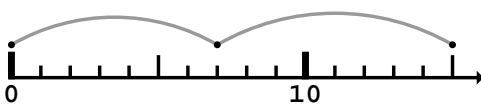
$$15 + 3 = 18$$

b)



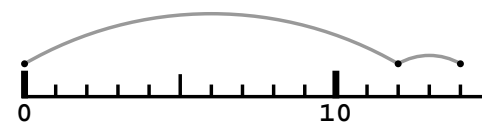
$$12 + 7 = 19$$

c)



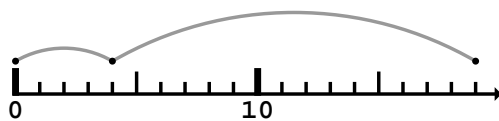
$$7 + 8 = 15$$

d)



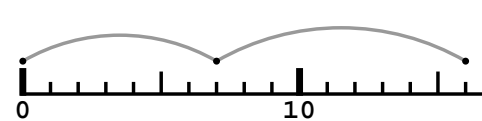
$$12 + 2 = 14$$

e)



$$4 + 15 = 19$$

f)



$$7 + 9 = 16$$